

Answer on Question #64167, Physics / Mechanics | Relativity

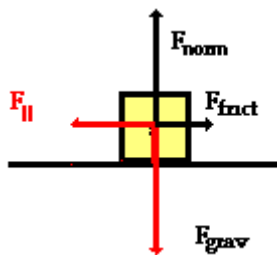
Diagramming

- Resolving a force to determine normal force and the force of friction.
- Defining coefficient of friction.
- Friction on a sliding body and illustrating the angle of repose.

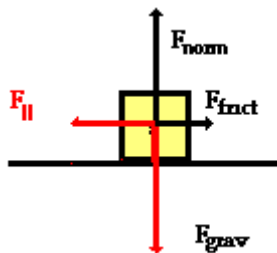
Answer:

The scheme of the forces at friction

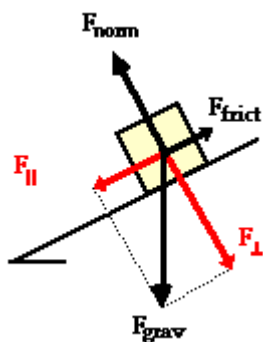
a)



b)



c)



Answer provided by <https://www.AssignmentExpert.com>