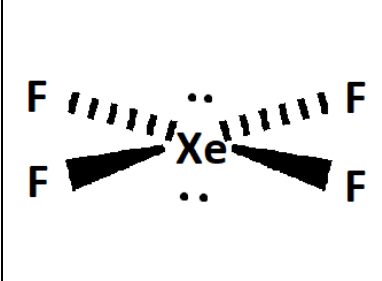
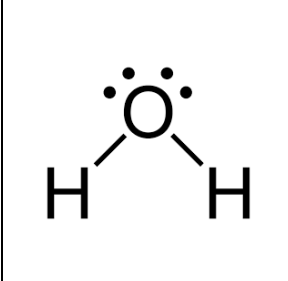
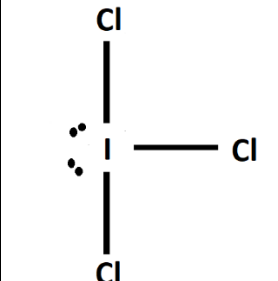


Answer on Question #74880 - Chemistry - Organic Chemistry

Question:

Draw the structure and hybridisation of the following compounds: XeF_4 , H_2O , ICl_3

Answer:

Structure			
Hybridisation	sp^3d^2	sp^3	sp^3d

Answer provided by AssignmentExpert.com