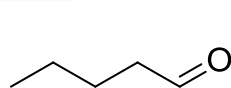


Answer on Question#38833 - Chemistry - Organic Chemistry

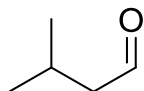
Question:

Draw the structures of 4 aldehydes with formula C₅H₁₀O.

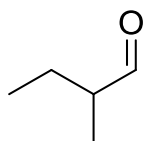
Answer:



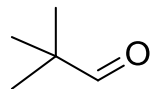
pentanal



3-methylbutanal



2-methylbutanal



pivalaldehyde